










Bryd billedkoden og løs regnestykkerne.

								
6	1	7	4	2	3	5	8	9

$$\text{ghost} + \text{bat} = \square$$

$$\text{bat} + \text{witch} = \square$$

$$\text{bat} + \text{witch} = \square$$

$$\text{bat} + \text{spider} = \square$$

$$\text{witch} + \text{ghost} = \square$$

$$\text{spider} + \text{spiderweb} = \square$$

$$\text{spiderweb} + \text{witch} = \square$$

$$\text{spider} + \text{pumpkin} = \square$$










$$\text{skull} + \text{spider} = \square$$

$$\text{witch} + \text{ghost} = \square$$

$$\text{pumpkin} + \text{witch} = \square$$

$$\text{ghost} + \text{pumpkin} = \square$$

Bryd billedkoden og løs regnestykkerne.

								
6	1	7	4	2	3	5	8	9

$$\text{ghost} + \text{bat on moon} = 7$$

$$\text{bat on moon} + \text{bat on moon} = 5$$

$$\text{bat on moon} + \text{bat on moon} = 5$$

$$\text{bat} + \text{spider} = 7$$

$$\text{bat on moon} + \text{ghost} = 6$$

$$\text{spider} + \text{spiderweb} = 8$$

$$\text{spiderweb} + \text{bat on moon} = 9$$

$$\text{spider} + \text{pumpkin} = 6$$

$$\text{skull} + \text{spider} = 9$$

$$\text{bat on moon} + \text{ghost} = 6$$

$$\text{pumpkin} + \text{bat on moon} = 7$$

$$\text{ghost} + \text{pumpkin} = 9$$