
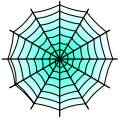









Bryd billedkoden og løs regnestykkerne.

								
3	9	2	6	8	5	4	7	1

$$\text{Cat} + \text{Bat} = \square$$

$$\text{Ghost} + \text{Cat} = \square$$

$$\text{Skull (side)} + \text{Cat} = \square$$

$$\text{Bat hanging} + \text{Skull (front)} = \square$$

$$\text{Bat hanging} + \text{Spider} = \square$$

$$\text{Ghost} + \text{Skull (front)} = \square$$

$$\text{Witch} + \text{Ghost} = \square$$

$$\text{Skull (front)} + \text{Bat} = \square$$






$$\text{Bat} + \text{Bat} = \square$$

$$\text{Spider} + \text{Cat} = \square$$

$$\text{Cat} + \text{Bat} = \square$$

$$\text{Bat} + \text{Skull (front)} = \square$$

Bryd billedkoden og løs regnestykkerne.

								
3	9	2	6	8	5	4	7	1

$$\text{Cat} + \text{Bat} = \boxed{5}$$

$$\text{Ghost} + \text{Cat} = \boxed{3}$$

$$\text{Skull} + \text{Cat} = \boxed{9}$$

$$\text{Bat} + \text{Skull} = \boxed{8}$$

$$\text{Bat} + \text{Spider} = \boxed{9}$$

$$\text{Ghost} + \text{Skull} = \boxed{7}$$

$$\text{Witch} + \text{Ghost} = \boxed{9}$$

$$\text{Skull} + \text{Bat} = \boxed{9}$$

$$\text{Bat} + \text{Bat} = \boxed{8}$$

$$\text{Spider} + \text{Cat} = \boxed{7}$$

$$\text{Cat} + \text{Bat} = \boxed{5}$$

$$\text{Bat} + \text{Skull} = \boxed{9}$$