

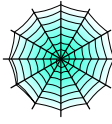








Bryd billedkoden og løs regnestykkerne.

								
3	4	5	6	7	9	8	2	1

$$\text{skull} + \text{witch on moon} = \square$$

$$\text{bat on moon} + \text{ghost} = \square$$

$$\text{spiderweb} + \text{pumpkin} = \square$$

$$\text{witch on moon} + \text{pumpkin} = \square$$

$$\text{pumpkin} + \text{bat on moon} = \square$$

$$\text{skull} + \text{witch on moon} = \square$$

$$\text{bat on moon} + \text{ghost} = \square$$

$$\text{ghost} + \text{spiderweb} = \square$$



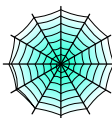






$$\text{witch on moon} + \text{witch on moon} = \square$$

$$\text{pumpkin} + \text{bat on moon} = \square$$

$$\text{ghost} + \text{ghost} = \square$$

$$\text{spider} + \text{witch on moon} = \square$$

Bryd billedkoden og løs regnestykkerne.

								
3	4	5	6	7	9	8	2	1

$$\text{skull} + \text{witch on moon} = \boxed{9}$$

$$\text{bat on moon} + \text{ghost} = \boxed{5}$$

$$\text{spiderweb} + \text{pumpkin} = \boxed{9}$$

$$\text{witch on moon} + \text{pumpkin} = \boxed{5}$$

$$\text{pumpkin} + \text{bat on moon} = \boxed{6}$$

$$\text{skull} + \text{witch on moon} = \boxed{7}$$

$$\text{bat on moon} + \text{ghost} = \boxed{5}$$

$$\text{ghost} + \text{spiderweb} = \boxed{8}$$

$$\text{witch on moon} + \text{witch on moon} = \boxed{2}$$

$$\text{pumpkin} + \text{bat on moon} = \boxed{6}$$

$$\text{ghost} + \text{ghost} = \boxed{6}$$

$$\text{spider} + \text{witch on moon} = \boxed{8}$$