










Bryd billedkoden og løs regnestykkerne.

								
5	9	2	8	4	3	7	6	1

$$\text{Bat} + \text{Bat} = \square$$

$$\text{Skull} + \text{Witch} = \square$$

$$\text{Bat} + \text{Bat} = \square$$

$$\text{Pumpkin} + \text{Witch} = \square$$

$$\text{Witch} + \text{Bat} = \square$$

$$\text{Ghost} + \text{Spiderweb} = \square$$

$$\text{Spiderweb} + \text{Spiderweb} = \square$$

$$\text{Skull} + \text{Witch} = \square$$










$$\text{Cat} + \text{Witch} = \square$$

$$\text{Spiderweb} + \text{Cat} = \square$$

$$\text{Skull} + \text{Pumpkin} = \square$$

$$\text{Witch} + \text{Cat} = \square$$

Bryd billedkoden og løs regnestykkerne.

								
5	9	2	8	4	3	7	6	1

$$\text{Bat} + \text{Bat} = \boxed{8}$$

$$\text{Skull} + \text{Witch} = \boxed{9}$$

$$\text{Bat} + \text{Bat} = \boxed{8}$$

$$\text{Pumpkin} + \text{Witch} = \boxed{6}$$

$$\text{Witch} + \text{Bat} = \boxed{5}$$

$$\text{Ghost} + \text{Spiderweb} = \boxed{9}$$

$$\text{Spiderweb} + \text{Spiderweb} = \boxed{4}$$

$$\text{Skull} + \text{Witch} = \boxed{4}$$

$$\text{Cat} + \text{Witch} = \boxed{7}$$

$$\text{Spiderweb} + \text{Cat} = \boxed{8}$$

$$\text{Skull} + \text{Pumpkin} = \boxed{8}$$

$$\text{Witch} + \text{Cat} = \boxed{7}$$