










Bryd billedkoden og løs regnestykkerne.

								
4	3	6	9	8	7	5	2	1

$$\text{Spider} + \text{Yellow Moon with Bat} = \square$$

$$\text{Skull} + \text{Yellow Moon with Bat} = \square$$

$$\text{Grey Cat} + \text{Bat hanging from cross} = \square$$

$$\text{Yellow Moon with Bat} + \text{Grey Cat} = \square$$

$$\text{Skull} + \text{Yellow Moon with Bat} = \square$$

$$\text{Yellow Moon with Bat} + \text{Grey Cat} = \square$$

$$\text{Pumpkin} + \text{Yellow Moon with Bat} = \square$$

$$\text{Bat hanging from cross} + \text{Skull} = \square$$










$$\text{Yellow Moon with Witch} + \text{Grey Cat} = \square$$

$$\text{Yellow Moon with Witch} + \text{Spider} = \square$$

$$\text{Bat hanging from cross} + \text{Bat hanging from cross} = \square$$

$$\text{Grey Cat} + \text{Bat hanging from cross} = \square$$

Bryd billedkoden og løs regnestykkerne.

								
4	3	6	9	8	7	5	2	1

$$\text{spider} + \text{bat on moon} = \boxed{6}$$

$$\text{skull} + \text{bat on moon} = \boxed{8}$$

$$\text{cat} + \text{bat} = \boxed{6}$$

$$\text{bat on moon} + \text{cat} = \boxed{5}$$

$$\text{skull} + \text{bat on moon} = \boxed{9}$$

$$\text{bat on moon} + \text{cat} = \boxed{5}$$

$$\text{pumpkin} + \text{bat on moon} = \boxed{7}$$

$$\text{bat} + \text{skull} = \boxed{9}$$

$$\text{bat on moon} + \text{cat} = \boxed{7}$$

$$\text{bat on moon} + \text{spider} = \boxed{8}$$

$$\text{bat} + \text{bat} = \boxed{4}$$

$$\text{cat} + \text{bat} = \boxed{6}$$