







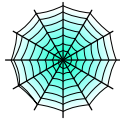










Bryd billedkoden og løs regnestykkerne.

								
8	4	2	7	5	9	3	6	1

 +  =


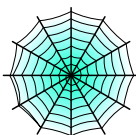
 +  =

 +  =

 +  =

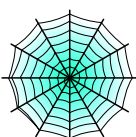
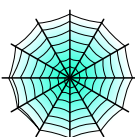
 +  =


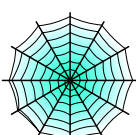
 +  =

 +  =

 +  =










 +  =

 +  =

 +  =

 +  =

Bryd billedkoden og løs regnestykkerne.

								
8	4	2	7	5	9	3	6	1

$$\text{ghost} + \text{bat} = \boxed{9}$$

$$\text{pumpkin} + \text{witch on moon} = \boxed{8}$$

$$\text{ghost} + \text{ghost} = \boxed{8}$$

$$\text{bat} + \text{spiderweb} = \boxed{6}$$

$$\text{cat} + \text{pumpkin} = \boxed{9}$$

$$\text{spiderweb} + \text{ghost} = \boxed{5}$$

$$\text{skull} + \text{spiderweb} = \boxed{9}$$

$$\text{bat on moon} + \text{pumpkin} = \boxed{5}$$

$$\text{pumpkin} + \text{ghost} = \boxed{6}$$

$$\text{spiderweb} + \text{spiderweb} = \boxed{2}$$

$$\text{witch on moon} + \text{spiderweb} = \boxed{7}$$

$$\text{bat on moon} + \text{bat on moon} = \boxed{6}$$