










Bryd billedkoden og løs regnestykkerne.

								
4	7	3	9	1	8	6	5	2

$$\text{spider} + \text{witch on moon} = \square$$

$$\text{skull} + \text{pumpkin} = \square$$

$$\text{pumpkin} + \text{bat on moon} = \square$$

$$\text{spider} + \text{bat on moon} = \square$$

$$\text{witch on moon} + \text{spider} = \square$$

$$\text{bat on moon} + \text{bat on moon} = \square$$

$$\text{ghost} + \text{witch on moon} = \square$$

$$\text{bat} + \text{pumpkin} = \square$$










$$\text{witch on moon} + \text{witch on moon} = \square$$

$$\text{skull} + \text{witch on moon} = \square$$

$$\text{bat on moon} + \text{pumpkin} = \square$$

$$\text{pumpkin} + \text{spider} = \square$$

Bryd billedkoden og løs regnestykkerne.

								
4	7	3	9	1	8	6	5	2

$$\text{Spider} + \text{Witch on broom} = 5$$

$$\text{Skull} + \text{Pumpkin} = 9$$

$$\text{Pumpkin} + \text{Yellow moon with bat} = 5$$

$$\text{Spider} + \text{Yellow moon with bat} = 7$$

$$\text{Witch on broom} + \text{Spider} = 5$$

$$\text{Yellow moon with bat} + \text{Yellow moon with bat} = 8$$

$$\text{Ghost} + \text{Witch on broom} = 9$$

$$\text{Bat} + \text{Pumpkin} = 7$$

$$\text{Witch on broom} + \text{Witch on broom} = 4$$

$$\text{Skull} + \text{Yellow moon with bat} = 7$$

$$\text{Yellow moon with bat} + \text{Pumpkin} = 5$$

$$\text{Pumpkin} + \text{Spider} = 4$$