










Bryd billedkoden og løs regnestykkerne.

								
5	8	6	7	1	3	9	4	2

$$\text{skull} + \text{ghost} = \square$$

$$\text{jack-o'-lantern} + \text{hanging bat} = \square$$

$$\text{moon with bat} + \text{jack-o'-lantern} = \square$$

$$\text{bat} + \text{bat} = \square$$

$$\text{jack-o'-lantern} + \text{ghost} = \square$$

$$\text{hanging bat} + \text{ghost} = \square$$

$$\text{cat} + \text{moon with witch} = \square$$

$$\text{bat} + \text{ghost} = \square$$










$$\text{ghost} + \text{hanging bat} = \square$$

$$\text{ghost} + \text{jack-o'-lantern} = \square$$

$$\text{moon with witch} + \text{ghost} = \square$$

$$\text{cat} + \text{ghost} = \square$$

Bryd billedkoden og løs regnestykkerne.

								
5	8	6	7	1	3	9	4	2

$$\text{skull} + \text{ghost} = \boxed{9}$$

$$\text{jack-o'-lantern} + \text{hanging bat} = \boxed{9}$$

$$\text{moon with bat} + \text{jack-o'-lantern} = \boxed{8}$$

$$\text{bat} + \text{bat} = \boxed{8}$$

$$\text{jack-o'-lantern} + \text{ghost} = \boxed{4}$$

$$\text{hanging bat} + \text{ghost} = \boxed{7}$$

$$\text{cat} + \text{moon with witch} = \boxed{9}$$

$$\text{bat} + \text{ghost} = \boxed{5}$$

$$\text{ghost} + \text{hanging bat} = \boxed{7}$$

$$\text{ghost} + \text{jack-o'-lantern} = \boxed{4}$$

$$\text{moon with witch} + \text{ghost} = \boxed{8}$$

$$\text{cat} + \text{ghost} = \boxed{3}$$