












Bryd billedkoden og løs regnestykkerne.


								
1	9	3	6	4	5	7	8	2



 +  =

 +  =

 +  =

 +  =

 +  =



 +  =


 +  =

 +  =










 +  =

 +  =

 +  =

 +  =

Bryd billedkoden og løs regnestykkerne.

								
1	9	3	6	4	5	7	8	2

$$\text{Pumpkin} + \text{Spiderweb} = \boxed{5}$$

$$\text{Skull} + \text{Ghost} = \boxed{9}$$

$$\text{Flying bat} + \text{Witch on broom} = \boxed{9}$$

$$\text{Spiderweb} + \text{Skull} = \boxed{4}$$

$$\text{Pumpkin} + \text{Pumpkin} = \boxed{8}$$

$$\text{Cat} + \text{Spiderweb} = \boxed{9}$$

$$\text{Witch on broom} + \text{Skull} = \boxed{5}$$

$$\text{Spiderweb} + \text{Skull} = \boxed{4}$$

$$\text{Skull} + \text{Pumpkin} = \boxed{7}$$

$$\text{Witch on broom} + \text{Ghost} = \boxed{8}$$

$$\text{Ghost} + \text{Spiderweb} = \boxed{7}$$

$$\text{Hanging bat} + \text{Pumpkin} = \boxed{9}$$