










Bryd billedkoden og løs regnestykkerne.

								
8	6	9	7	2	1	5	4	3

$$\text{bat in moon} + \text{bat hanging} = \square$$

$$\text{spiderweb} + \text{bat hanging} = \square$$

$$\text{spiderweb} + \text{bat} = \square$$

$$\text{skull} + \text{skull} = \square$$

$$\text{bat hanging} + \text{spiderweb} = \square$$

$$\text{ghost} + \text{skull} = \square$$

$$\text{ghost} + \text{bat} = \square$$

$$\text{bat hanging} + \text{cat} = \square$$










$$\text{bat in moon} + \text{skull} = \square$$

$$\text{skull} + \text{ghost} = \square$$

$$\text{skull} + \text{bat hanging} = \square$$

$$\text{cat} + \text{bat hanging} = \square$$

Bryd billedkoden og løs regnestykkerne.

								
8	6	9	7	2	1	5	4	3

$$\text{bat} + \text{bat hanging} = 7$$

$$\text{spiderweb} + \text{bat hanging} = 4$$

$$\text{spiderweb} + \text{bat} = 9$$

$$\text{skull} + \text{skull} = 8$$

$$\text{bat hanging} + \text{spiderweb} = 4$$

$$\text{ghost} + \text{skull} = 6$$

$$\text{ghost} + \text{bat} = 8$$

$$\text{bat hanging} + \text{cat} = 9$$

$$\text{bat in moon} + \text{skull} = 9$$

$$\text{skull} + \text{ghost} = 6$$

$$\text{skull} + \text{bat hanging} = 8$$

$$\text{cat} + \text{bat hanging} = 9$$