










Bryd billedkoden og løs regnestykkerne.

								
2	4	6	7	8	5	1	9	3

$$\text{Witch} + \text{Skull} = \square$$

$$\text{Skull} + \text{Spider} = \square$$

$$\text{Yellow moon with bat} + \text{Skull} = \square$$

$$\text{Spider} + \text{Spider} = \square$$

$$\text{Pumpkin} + \text{Skull} = \square$$

$$\text{Spider} + \text{Spiderweb} = \square$$

$$\text{Skull} + \text{Spider} = \square$$

$$\text{Bat} + \text{Skull} = \square$$










$$\text{Cat} + \text{Skull} = \square$$

$$\text{Spiderweb} + \text{Spiderweb} = \square$$

$$\text{Spiderweb} + \text{Spider} = \square$$

$$\text{Pumpkin} + \text{Spiderweb} = \square$$

Bryd billedkoden og løs regnestykkerne.

								
2	4	6	7	8	5	1	9	3

$$\text{Witch} + \text{Skull} = \boxed{6}$$

$$\text{Skull} + \text{Spider} = \boxed{4}$$

$$\text{Moon with bat} + \text{Skull} = \boxed{8}$$

$$\text{Spider} + \text{Spider} = \boxed{6}$$

$$\text{Pumpkin} + \text{Skull} = \boxed{3}$$

$$\text{Spider} + \text{Spiderweb} = \boxed{7}$$

$$\text{Skull} + \text{Spider} = \boxed{4}$$

$$\text{Bat} + \text{Skull} = \boxed{7}$$

$$\text{Cat} + \text{Skull} = \boxed{9}$$

$$\text{Spiderweb} + \text{Spiderweb} = \boxed{8}$$

$$\text{Spiderweb} + \text{Spider} = \boxed{7}$$

$$\text{Pumpkin} + \text{Spiderweb} = \boxed{6}$$