

Bryd billedkoden og løs regnestykkerne.

								
7	2	5	1	6	8	4	9	3

$$\text{Jack-o'-lantern} + \text{Bat} = \boxed{\phantom{00}}$$

$$\text{Ghost} + \text{Ghost} = \boxed{\phantom{00}}$$

$$\text{Spiderweb} + \text{Bat} = \boxed{\phantom{00}}$$

$$\text{Spiderweb} + \text{Spider} = \boxed{\phantom{00}}$$

$$\text{Skull} + \text{Spiderweb} = \boxed{\phantom{00}}$$

$$\text{Spider} + \text{Spiderweb} = \boxed{\phantom{00}}$$

$$\text{Cat} + \text{Jack-o'-lantern} = \boxed{\phantom{00}}$$

$$\text{Bat} + \text{Bat} = \boxed{\phantom{00}}$$










$$\text{Ghost} + \text{Bat} = \boxed{\phantom{00}}$$

$$\text{Bat} + \text{Spider} = \boxed{\phantom{00}}$$

$$\text{Jack-o'-lantern} + \text{Spider} = \boxed{\phantom{00}}$$

$$\text{Witch} + \text{Jack-o'-lantern} = \boxed{\phantom{00}}$$

Bryd billedkoden og løs regnestykkerne.

								
7	2	5	1	6	8	4	9	3

$$\text{Pumpkin} + \text{Bat} = \boxed{4}$$

$$\text{Ghost} + \text{Ghost} = \boxed{8}$$

$$\text{Spiderweb} + \text{Bat} = \boxed{5}$$

$$\text{Spiderweb} + \text{Spider} = \boxed{7}$$

$$\text{Skull} + \text{Spiderweb} = \boxed{8}$$

$$\text{Spider} + \text{Spiderweb} = \boxed{7}$$

$$\text{Cat} + \text{Pumpkin} = \boxed{9}$$

$$\text{Bat} + \text{Bat} = \boxed{6}$$

$$\text{Ghost} + \text{Bat} = \boxed{7}$$

$$\text{Bat} + \text{Spider} = \boxed{8}$$

$$\text{Pumpkin} + \text{Spider} = \boxed{6}$$

$$\text{Witch} + \text{Pumpkin} = \boxed{8}$$