










Bryd billedkoden og løs regnestykkerne.

								
7	8	9	3	1	5	2	6	4

$$\text{Cat} + \text{Witch} = \square$$

$$\text{Hanging bat} + \text{Bat} = \square$$

$$\text{Spiderweb} + \text{Witch} = \square$$

$$\text{Pumpkin} + \text{Bat} = \square$$

$$\text{Witch} + \text{Pumpkin} = \square$$

$$\text{Skull} + \text{Bat} = \square$$

$$\text{Spider} + \text{Bat} = \square$$

$$\text{Bat} + \text{Spider} = \square$$









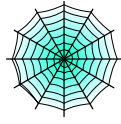
$$\text{Pumpkin} + \text{Pumpkin} = \square$$

$$\text{Witch} + \text{Pumpkin} = \square$$

$$\text{Spiderweb} + \text{Witch} = \square$$

$$\text{Bat} + \text{Spiderweb} = \square$$

Bryd billedkoden og løs regnestykkerne.

								
7	8	9	3	1	5	2	6	4

$$\text{Cat} + \text{Witch} = \boxed{9}$$

$$\text{Scythe} + \text{Bat} = \boxed{8}$$

$$\text{Spiderweb} + \text{Witch} = \boxed{5}$$

$$\text{Pumpkin} + \text{Bat} = \boxed{5}$$

$$\text{Witch} + \text{Pumpkin} = \boxed{4}$$

$$\text{Skull} + \text{Bat} = \boxed{9}$$

$$\text{Spider} + \text{Bat} = \boxed{7}$$

$$\text{Bat} + \text{Spider} = \boxed{7}$$

$$\text{Pumpkin} + \text{Pumpkin} = \boxed{6}$$

$$\text{Witch} + \text{Pumpkin} = \boxed{4}$$

$$\text{Spiderweb} + \text{Witch} = \boxed{5}$$

$$\text{Bat} + \text{Spiderweb} = \boxed{6}$$