










Bryd billedkoden og løs regnestykkerne.

| | | | | | | | | |
|---|---|---|---|---|--|---|---|---|
|  |  |  |  |  |  |  |  |  |
| 7 | 1 | 8 | 2 | 6 | 5 | 3 | 4 | 9 |

$$\text{Ghost} + \text{Cat} = \square$$

$$\text{Ghost} + \text{Ghost} = \square$$

$$\text{Bat on yellow circle} + \text{Witch on yellow circle} = \square$$

$$\text{Bat} + \text{Cat} = \square$$

$$\text{Bat} + \text{Hanging body} = \square$$

$$\text{Witch on yellow circle} + \text{Skull} = \square$$

$$\text{Skull} + \text{Skull} = \square$$

$$\text{Witch on yellow circle} + \text{Skull} = \square$$










$$\text{Skull} + \text{Ghost} = \square$$

$$\text{Hanging body} + \text{Skull} = \square$$

$$\text{Hanging body} + \text{Bat} = \square$$

$$\text{Spiderweb} + \text{Bat} = \square$$

Bryd billedkoden og løs regnestykkerne.

| | | | | | | | | |
|---|---|---|---|---|--|---|---|---|
|  |  |  |  |  |  |  |  |  |
| 7 | 1 | 8 | 2 | 6 | 5 | 3 | 4 | 9 |

$$\text{Ghost} + \text{Cat} = 13$$

$$\text{Ghost} + \text{Ghost} = 8$$

$$\text{Yellow moon with bat} + \text{Witch on broom} = 7$$

$$\text{Bat} + \text{Cat} = 11$$

$$\text{Bat} + \text{Hanging bat} = 5$$

$$\text{Witch on broom} + \text{Skull} = 6$$

$$\text{Skull} + \text{Skull} = 16$$

$$\text{Witch on broom} + \text{Skull} = 6$$

$$\text{Skull} + \text{Ghost} = 9$$

$$\text{Hanging bat} + \text{Skull} = 11$$

$$\text{Hanging bat} + \text{Bat} = 5$$

$$\text{Spiderweb} + \text{Bat} = 9$$