










Bryd billedkoden og løs regnestykkerne.

								
4	3	6	9	8	7	5	2	1

$$\text{spider} + \text{bat} = \square$$

$$\text{skull} + \text{cat} = \square$$

$$\text{cat} + \text{witch} = \square$$

$$\text{bat} + \text{cat} = \square$$

$$\text{skull} + \text{bat} = \square$$

$$\text{bat} + \text{cat} = \square$$

$$\text{pumpkin} + \text{bat} = \square$$

$$\text{bat} + \text{bat} = \square$$










$$\text{witch} + \text{pumpkin} = \square$$

$$\text{witch} + \text{skull} = \square$$

$$\text{bat} + \text{bat} = \square$$

$$\text{cat} + \text{cat} = \square$$

Bryd billedkoden og løs regnestykkerne.

								
4	3	6	9	8	7	5	2	1

$$\text{spider} + \text{bat} = \boxed{7}$$

$$\text{skull} + \text{cat} = \boxed{11}$$

$$\text{cat} + \text{witch} = \boxed{7}$$

$$\text{bat} + \text{cat} = \boxed{5}$$

$$\text{skull} + \text{bat} = \boxed{10}$$

$$\text{bat} + \text{cat} = \boxed{5}$$

$$\text{pumpkin} + \text{bat} = \boxed{8}$$

$$\text{bat} + \text{bat} = \boxed{11}$$

$$\text{witch} + \text{pumpkin} = \boxed{9}$$

$$\text{witch} + \text{skull} = \boxed{10}$$

$$\text{bat} + \text{bat} = \boxed{4}$$

$$\text{cat} + \text{cat} = \boxed{8}$$