







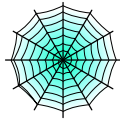










Bryd billedkoden og løs regnestykkerne.

								
8	4	2	7	5	9	3	6	1

 +  =

 +  =

 +  =



 +  =


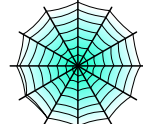
 +  =

 +  =

 +  =

 +  =










 +  =

 +  =

 +  =

 +  =

Bryd billedkoden og løs regnestykkerne.

								
8	4	2	7	5	9	3	6	1

$$\text{ghost} + \text{bat on a cross} = 13$$

$$\text{pumpkin} + \text{cat} = 9$$

$$\text{ghost} + \text{cat} = 11$$

$$\text{bat} + \text{bat on a yellow moon} = 8$$

$$\text{cat} + \text{bat on a cross} = 16$$

$$\text{spiderweb} + \text{ghost} = 5$$

$$\text{skull} + \text{pumpkin} = 10$$

$$\text{bat on a yellow moon} + \text{bat on a yellow moon} = 6$$

$$\text{pumpkin} + \text{bat} = 7$$

$$\text{spiderweb} + \text{spiderweb} = 2$$

$$\text{witch on a yellow moon} + \text{pumpkin} = 8$$

$$\text{bat on a yellow moon} + \text{bat} = 8$$