










Bryd billedkoden og løs regnestykkerne.

								
4	7	3	9	1	8	6	5	2

$$\text{Spider} + \text{Spider} = \square$$

$$\text{Skull} + \text{Spider} = \square$$

$$\text{Jack-o'-lantern} + \text{Yellow moon with bat} = \square$$

$$\text{Spider} + \text{Brown bat flying} = \square$$

$$\text{Yellow moon with witch} + \text{Yellow moon with bat} = \square$$

$$\text{Yellow moon with bat} + \text{White ghost} = \square$$

$$\text{White ghost} + \text{Brown bat hanging} = \square$$

$$\text{Brown bat flying} + \text{Yellow moon with witch} = \square$$










$$\text{Yellow moon with witch} + \text{Spider} = \square$$

$$\text{Skull} + \text{Skull} = \square$$

$$\text{Yellow moon with bat} + \text{Jack-o'-lantern} = \square$$

$$\text{Jack-o'-lantern} + \text{Yellow moon with bat} = \square$$

Bryd billedkoden og løs regnestykkerne.

								
4	7	3	9	1	8	6	5	2

$$\text{Spider} + \text{Spider} = \boxed{6}$$

$$\text{Skull} + \text{Spider} = \boxed{11}$$

$$\text{Pumpkin} + \text{Yellow Moon with Bat} = \boxed{5}$$

$$\text{Spider} + \text{Bat} = \boxed{9}$$

$$\text{Witch on Broom} + \text{Yellow Moon with Bat} = \boxed{6}$$

$$\text{Yellow Moon with Bat} + \text{Ghost} = \boxed{11}$$

$$\text{Ghost} + \text{Hanging Bat} = \boxed{16}$$

$$\text{Bat} + \text{Witch on Broom} = \boxed{8}$$

$$\text{Witch on Broom} + \text{Spider} = \boxed{5}$$

$$\text{Skull} + \text{Skull} = \boxed{10}$$

$$\text{Yellow Moon with Bat} + \text{Pumpkin} = \boxed{5}$$

$$\text{Pumpkin} + \text{Yellow Moon with Bat} = \boxed{5}$$