










Bryd billedkoden og løs regnestykkerne.

								
8	6	9	7	2	1	5	4	3

$$\text{bat} + \text{spiderweb} = \square$$

$$\text{spiderweb} + \text{ghost} = \square$$

$$\text{spiderweb} + \text{cat} = \square$$

$$\text{skull} + \text{bat} = \square$$

$$\text{bat hanging} + \text{spiderweb} = \square$$

$$\text{ghost} + \text{witch} = \square$$

$$\text{ghost} + \text{cat} = \square$$

$$\text{bat hanging} + \text{spider} = \square$$










$$\text{witch} + \text{spider} = \square$$

$$\text{skull} + \text{spiderweb} = \square$$

$$\text{skull} + \text{bat hanging} = \square$$

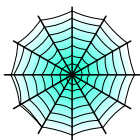
$$\text{cat} + \text{witch} = \square$$

Bryd billedkoden og løs regnestykkerne.

								
8	6	9	7	2	1	5	4	3

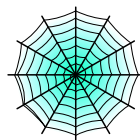


+



=

9




+



=

5



+



=

11



+




=

10



+



=

4



+




=

7



+



=

10



+



=

10



+




=

14



+



=

7



+



=

8



+



=

13