










Bryd billedkoden og løs regnestykkerne.

								
5	2	4	9	8	1	6	7	3

$$\text{Skull} + \text{Skull} = \square$$

$$\text{Spider} + \text{Bat} = \square$$

$$\text{Bat} + \text{Spider} = \square$$

$$\text{Cat} + \text{Skull} = \square$$

$$\text{Spiderweb} + \text{Cat} = \square$$

$$\text{Hanging bat} + \text{Spiderweb} = \square$$

$$\text{Spider} + \text{Pumpkin} = \square$$

$$\text{Hanging bat} + \text{Ghost} = \square$$










$$\text{Bat} + \text{Ghost} = \square$$

$$\text{Spiderweb} + \text{Ghost} = \square$$

$$\text{Yellow moon with bat} + \text{Hanging bat} = \square$$

$$\text{Pumpkin} + \text{Spider} = \square$$

Bryd billedkoden og løs regnestykkerne.

								
5	2	4	9	8	1	6	7	3

$$\text{Skull} + \text{Skull} = 14$$

$$\text{Spider} + \text{Bat} = 4$$

$$\text{Bat} + \text{Spider} = 4$$

$$\text{Cat} + \text{Skull} = 15$$

$$\text{Spiderweb} + \text{Cat} = 10$$

$$\text{Hanging pumpkin} + \text{Spiderweb} = 6$$

$$\text{Spider} + \text{Pumpkin} = 8$$

$$\text{Hanging pumpkin} + \text{Ghost} = 13$$

$$\text{Bat} + \text{Ghost} = 10$$

$$\text{Spiderweb} + \text{Ghost} = 11$$

$$\text{Yellow moon with bat} + \text{Hanging pumpkin} = 10$$

$$\text{Pumpkin} + \text{Spider} = 8$$