







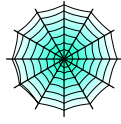


Bryd billedkoden og indsæt de manglende tal.

								
4	2	3	5	9	8	6	1	7

$$\square + \text{witch on yellow moon} = \text{bat}$$

$$\text{bat on cross} + \square = \text{pumpkin}$$

$$\square + \text{bat on cross} = \text{bat on yellow moon}$$

$$\text{skull} + \square = \text{pumpkin}$$

$$\square + \text{ghost} = \text{pumpkin}$$

$$\text{witch on yellow moon} + \square = \text{bat on yellow moon}$$

$$\square + \text{witch on yellow moon} = \text{spiderweb}$$

$$\square + \text{ghost} = \text{skull}$$









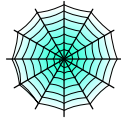
$$\square + \text{bat on cross} = \text{bat}$$

$$\text{bat on yellow moon} + \square = \text{spiderweb}$$

$$\square + \text{skull} = \text{spiderweb}$$

$$\text{bat on cross} + \square = \text{skull}$$

Bryd billedkoden og indsæt de manglende tal.

								
4	2	3	5	9	8	6	1	7

$$\boxed{2} + \text{witch on broom} = \text{bat}$$

$$\text{bat on cross} + \boxed{8} = \text{pumpkin}$$

$$\boxed{5} + \text{bat on cross} = \text{bat on moon}$$

$$\text{skull} + \boxed{1} = \text{pumpkin}$$

$$\boxed{7} + \text{ghost} = \text{pumpkin}$$

$$\text{witch on broom} + \boxed{3} = \text{bat on moon}$$

$$\boxed{4} + \text{witch on broom} = \text{spiderweb}$$

$$\boxed{2} + \text{ghost} = \text{skull}$$

$$\boxed{4} + \text{bat on cross} = \text{bat}$$

$$\text{bat on moon} + \boxed{1} = \text{spiderweb}$$

$$\boxed{3} + \text{skull} = \text{spiderweb}$$

$$\text{bat on cross} + \boxed{3} = \text{skull}$$