










Bryd billedkoden og indsæt de manglende tal.

								
4	6	7	8	1	3	9	5	2

$$\text{skull} + \square = \text{spider}$$

$$\square + \text{ghost} = \text{bat}$$

$$\square + \text{ghost} = \text{pumpkin}$$

$$\text{pumpkin} + \square = \text{ghost}$$

$$\square + \text{pumpkin} = \text{bat}$$

$$\text{cat} + \square = \text{pumpkin}$$

$$\square + \text{bat} = \text{bat}$$

$$\text{bat} + \square = \text{skull}$$





$$\square + \text{ghost} = \text{skull}$$

$$\square + \text{bat} = \text{skull}$$

$$\square + \text{ghost} = \text{bat}$$

$$\square + \text{pumpkin} = \text{spider}$$

Bryd billedkoden og indsæt de manglende tal.

								
4	6	7	8	1	3	9	5	2

$$\text{skull} + \boxed{1} = \text{spider}$$

$$\boxed{4} + \text{ghost} = \text{bat}$$

$$\boxed{2} + \text{ghost} = \text{pumpkin}$$

$$\text{pumpkin} + \boxed{3} = \text{ghost}$$

$$\boxed{1} + \text{pumpkin} = \text{bat}$$

$$\text{cat} + \boxed{1} = \text{pumpkin}$$

$$\boxed{1} + \text{bat} = \text{bat with moon}$$

$$\text{bat with moon} + \boxed{3} = \text{skull}$$

$$\boxed{7} + \text{ghost} = \text{skull}$$

$$\boxed{3} + \text{bat with moon} = \text{skull}$$

$$\boxed{4} + \text{ghost} = \text{bat with moon}$$

$$\boxed{6} + \text{pumpkin} = \text{spider}$$