










Bryd billedkoden og løs regnestykkerne.

								
6	8	9	5	2	1	4	7	3

$$\text{Witch on broom} - \text{Moon with bat} = \square$$

$$\text{Pumpkin} - \text{Bat} = \square$$

$$\text{Spider} - \text{Bat} = \square$$

$$\text{Pumpkin} - \text{Moon with bat} = \square$$

$$\text{Hanging bat} - \text{Spider} = \square$$

$$\text{Spiderweb} - \text{Spider} = \square$$

$$\text{Cat} - \text{Witch on broom} = \square$$

$$\text{Pumpkin} - \text{Spider} = \square$$










$$\text{Ghost} - \text{Bat} = \square$$

$$\text{Cat} - \text{Ghost} = \square$$

$$\text{Spiderweb} - \text{Moon with bat} = \square$$

$$\text{Cat} - \text{Ghost} = \square$$

Bryd billedkoden og løs regnestykkerne.

								
6	8	9	5	2	1	4	7	3

$$\text{Witch on broom} - \text{Moon with bat} = \boxed{3}$$

$$\text{Pumpkin} - \text{Bat} = \boxed{3}$$

$$\text{Spider} - \text{Bat} = \boxed{1}$$

$$\text{Pumpkin} - \text{Moon with bat} = \boxed{4}$$

$$\text{Hanging bat} - \text{Spider} = \boxed{4}$$

$$\text{Spiderweb} - \text{Spider} = \boxed{3}$$

$$\text{Cat} - \text{Witch on broom} = \boxed{5}$$

$$\text{Pumpkin} - \text{Spider} = \boxed{2}$$

$$\text{Ghost} - \text{Bat} = \boxed{6}$$

$$\text{Cat} - \text{Ghost} = \boxed{1}$$

$$\text{Spiderweb} - \text{Moon with bat} = \boxed{5}$$

$$\text{Cat} - \text{Ghost} = \boxed{1}$$