










Bryd billedkoden og løs regnestykkerne.

								
2	5	1	3	7	9	6	4	8

$$\text{Skull} - \text{Skull} = \square$$

$$\text{Spider} - \text{Ghost} = \square$$

$$\text{Skull} - \text{Ghost} = \square$$

$$\text{Bat} - \text{Cat} = \square$$

$$\text{Skull} - \text{Cat} = \square$$

$$\text{Skull} - \text{Bat} = \square$$

$$\text{Skull} - \text{Bat} = \square$$

$$\text{Spider} - \text{Bat} = \square$$










$$\text{Spiderweb} - \text{Bat} = \square$$

$$\text{Witch} - \text{Spider} = \square$$

$$\text{Skull} - \text{Bat} = \square$$

$$\text{Witch} - \text{Cat} = \square$$

Bryd billedkoden og løs regnestykkerne.

								
2	5	1	3	7	9	6	4	8

$$\text{skull} - \text{skull} = \boxed{3}$$

$$\text{spider} - \text{ghost} = \boxed{4}$$

$$\text{skull} - \text{ghost} = \boxed{3}$$

$$\text{bat} - \text{cat} = \boxed{2}$$

$$\text{skull} - \text{cat} = \boxed{7}$$

$$\text{skull} - \text{bat} = \boxed{2}$$

$$\text{skull} - \text{bat} = \boxed{4}$$

$$\text{spider} - \text{bat} = \boxed{2}$$

$$\text{spiderweb} - \text{bat} = \boxed{5}$$

$$\text{witch} - \text{spider} = \boxed{1}$$

$$\text{skull} - \text{bat} = \boxed{5}$$

$$\text{witch} - \text{cat} = \boxed{6}$$