










Bryd billedkoden og løs regnestykkerne.



								
6	5	4	8	3	7	9	1	2

 -  =



 -  =


 -  =

 -  =

 -  =

 -  =

 -  =

 -  =


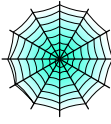







 -  =

 -  =

 -  =

 -  =

Bryd billedkoden og løs regnestykkerne.

								
6	5	4	8	3	7	9	1	2

$$\text{pumpkin} - \text{ghost} = \boxed{1}$$

$$\text{bat} - \text{witch} = \boxed{8}$$

$$\text{bat} - \text{witch} = \boxed{1}$$

$$\text{bat} - \text{skull} = \boxed{3}$$

$$\text{pumpkin} - \text{bat} = \boxed{2}$$

$$\text{spiderweb} - \text{ghost} = \boxed{2}$$

$$\text{spider} - \text{bat} = \boxed{5}$$

$$\text{pumpkin} - \text{ghost} = \boxed{1}$$

$$\text{pumpkin} - \text{ghost} = \boxed{1}$$

$$\text{skull} - \text{ghost} = \boxed{5}$$

$$\text{skull} - \text{pumpkin} = \boxed{4}$$

$$\text{spiderweb} - \text{ghost} = \boxed{2}$$