














Bryd billedkoden og løs regnestykkerne.

								
1	7	5	2	3	8	6	4	9

 -  =



 -  =


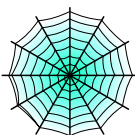
 -  =


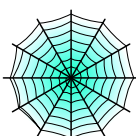
 -  =

 -  =



 -  =

 -  =

 -  =










 -  =

 -  =

 -  =

 -  =

Bryd billedkoden og løs regnestykkerne.

								
1	7	5	2	3	8	6	4	9

$$\text{Skull (8)} - \text{Spiderweb (2)} = \boxed{6}$$

$$\text{Bat hanging (9)} - \text{Ghost (7)} = \boxed{2}$$

$$\text{Jack-o'-lantern (5)} - \text{Witch (1)} = \boxed{4}$$

$$\text{Skull (8)} - \text{Jack-o'-lantern (5)} = \boxed{3}$$

$$\text{Cat (6)} - \text{Witch (1)} = \boxed{5}$$

$$\text{Skull (8)} - \text{Skull (3)} = \boxed{5}$$

$$\text{Ghost (7)} - \text{Bat (4)} = \boxed{3}$$

$$\text{Ghost (7)} - \text{Spiderweb (2)} = \boxed{5}$$

$$\text{Bat (4)} - \text{Spiderweb (2)} = \boxed{2}$$

$$\text{Spiderweb (2)} - \text{Witch (1)} = \boxed{1}$$

$$\text{Ghost (7)} - \text{Bat (4)} = \boxed{3}$$

$$\text{Ghost (7)} - \text{Skull (3)} = \boxed{4}$$