










Bryd billedkoden og løs regnestykkerne.

| | | | | | | | | |
|---|---|---|---|---|--|---|---|---|
|  |  |  |  |  |  |  |  |  |
| 4 | 3 | 6 | 9 | 8 | 7 | 5 | 2 | 1 |

$$\text{pumpkin} - \text{bat} = \square$$

$$\text{skull} - \text{cat} = \square$$

$$\text{spider} - \text{witch} = \square$$

$$\text{cat} - \text{bat} = \square$$

$$\text{bat} - \text{bat} = \square$$

$$\text{cat} - \text{bat} = \square$$

$$\text{skull} - \text{bat} = \square$$

$$\text{bat} - \text{witch} = \square$$










$$\text{pumpkin} - \text{cat} = \square$$

$$\text{skull} - \text{cat} = \square$$

$$\text{witch} - \text{bat} = \square$$

$$\text{spider} - \text{cat} = \square$$

Bryd billedkoden og løs regnestykkerne.

| | | | | | | | | |
|---|---|---|---|---|--|---|---|---|
|  |  |  |  |  |  |  |  |  |
| 4 | 3 | 6 | 9 | 8 | 7 | 5 | 2 | 1 |

$$\text{pumpkin} - \text{bat} = 4$$

$$\text{skull} - \text{cat} = 4$$

$$\text{spider} - \text{witch} = 2$$

$$\text{cat} - \text{bat} = 2$$

$$\text{bat} - \text{bat} = 7$$

$$\text{cat} - \text{bat} = 2$$

$$\text{skull} - \text{bat} = 5$$

$$\text{bat} - \text{witch} = 6$$

$$\text{pumpkin} - \text{cat} = 2$$

$$\text{skull} - \text{cat} = 3$$

$$\text{witch} - \text{bat} = 1$$

$$\text{spider} - \text{cat} = 1$$