










Bryd billedkoden og løs regnestykkerne.

| | | | | | | | | |
|-----------------------------------------------------------------------------------|-----------------------------------------------------------------------------------|-----------------------------------------------------------------------------------|-----------------------------------------------------------------------------------|-----------------------------------------------------------------------------------|------------------------------------------------------------------------------------|-------------------------------------------------------------------------------------|-------------------------------------------------------------------------------------|-------------------------------------------------------------------------------------|
|  |  |  |  |  |  |  |  |  |
| 3 | 7 | 8 | 2 | 4 | 6 | 9 | 1 | 5 |

$$\text{Skull} - \text{Skull} = \boxed{}$$

$$\text{Bat on moon} - \text{Witch on moon} = \boxed{}$$

$$\text{Pumpkin} - \text{Skull} = \boxed{}$$

$$\text{Skull} - \text{Ghost} = \boxed{}$$

$$\text{Bat} - \text{Ghost} = \boxed{}$$

$$\text{Pumpkin} - \text{Scythe} = \boxed{}$$

$$\text{Skull} - \text{Ghost} = \boxed{}$$

$$\text{Bat on moon} - \text{Witch on moon} = \boxed{}$$










$$\text{Bat} - \text{Witch on moon} = \boxed{}$$

$$\text{Spiderweb} - \text{Bat} = \boxed{}$$

$$\text{Witch on moon} - \text{Ghost} = \boxed{}$$

$$\text{Bat on moon} - \text{Witch on moon} = \boxed{}$$

Bryd billedkoden og løs regnestykkerne.

| | | | | | | | | |
|-----------------------------------------------------------------------------------|-----------------------------------------------------------------------------------|-----------------------------------------------------------------------------------|-----------------------------------------------------------------------------------|-----------------------------------------------------------------------------------|------------------------------------------------------------------------------------|-------------------------------------------------------------------------------------|-------------------------------------------------------------------------------------|-------------------------------------------------------------------------------------|
|  |  |  |  |  |  |  |  |  |
| 3 | 7 | 8 | 2 | 4 | 6 | 9 | 1 | 5 |

$$\text{Skull} - \text{Skull} = \boxed{4}$$

$$\text{Bat on moon} - \text{Witch on moon} = \boxed{3}$$

$$\text{Pumpkin} - \text{Skull} = \boxed{5}$$

$$\text{Skull} - \text{Ghost} = \boxed{2}$$

$$\text{Bat} - \text{Ghost} = \boxed{3}$$

$$\text{Pumpkin} - \text{Scythe} = \boxed{8}$$

$$\text{Skull} - \text{Ghost} = \boxed{2}$$

$$\text{Bat on moon} - \text{Witch on moon} = \boxed{3}$$

$$\text{Bat} - \text{Witch on moon} = \boxed{2}$$

$$\text{Spiderweb} - \text{Bat} = \boxed{2}$$

$$\text{Witch on moon} - \text{Ghost} = \boxed{1}$$

$$\text{Bat on moon} - \text{Witch on moon} = \boxed{3}$$