










Bryd billedkoden og løs regnestykkerne.

								
5	8	6	7	1	3	9	4	2

$$\text{Spider} - \text{Bat} = \square$$

$$\text{Skull} - \text{Bat} = \square$$

$$\text{Witch} - \text{Hanging bat} = \square$$

$$\text{Witch} - \text{Moon} = \square$$

$$\text{Bat} - \text{Ghost} = \square$$

$$\text{Witch} - \text{Jack-o'-lantern} = \square$$

$$\text{Spider} - \text{Jack-o'-lantern} = \square$$

$$\text{Moon} - \text{Cat} = \square$$










$$\text{Witch} - \text{Cat} = \square$$

$$\text{Bat} - \text{Cat} = \square$$

$$\text{Skull} - \text{Ghost} = \square$$

$$\text{Jack-o'-lantern} - \text{Ghost} = \square$$

Bryd billedkoden og løs regnestykkerne.

								
5	8	6	7	1	3	9	4	2

$$\text{Spider} - \text{Bat} = 5$$

$$\text{Skull} - \text{Bat} = 4$$

$$\text{Witch} - \text{Hanging bat} = 1$$

$$\text{Witch} - \text{Moon} = 2$$

$$\text{Bat} - \text{Ghost} = 3$$

$$\text{Witch} - \text{Jack-o'-lantern} = 4$$

$$\text{Spider} - \text{Jack-o'-lantern} = 6$$

$$\text{Moon} - \text{Cat} = 3$$

$$\text{Witch} - \text{Cat} = 5$$

$$\text{Bat} - \text{Cat} = 2$$

$$\text{Skull} - \text{Ghost} = 7$$

$$\text{Jack-o'-lantern} - \text{Ghost} = 2$$