










Bryd billedkoden og løs regnestykkerne.

								
8	6	9	7	2	1	5	4	3

$$\text{skull} - \text{spiderweb} = \square$$

$$\text{skull} - \text{ghost} = \square$$

$$\text{cat} - \text{skull} = \square$$

$$\text{bat} - \text{bat} = \square$$

$$\text{spiderweb} - \text{ghost} = \square$$

$$\text{bat} - \text{spiderweb} = \square$$

$$\text{cat} - \text{spiderweb} = \square$$

$$\text{spider} - \text{ghost} = \square$$









$$\text{spider} - \text{bat} = \square$$

$$\text{bat} - \text{spiderweb} = \square$$

$$\text{cat} - \text{bat} = \square$$

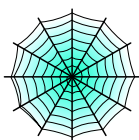
$$\text{spider} - \text{bat} = \square$$

Bryd billedkoden og løs regnestykkerne.

								
8	6	9	7	2	1	5	4	3



-



=

4



-



=

2



-



=

4

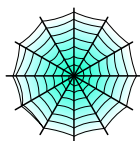


-



=

1



-

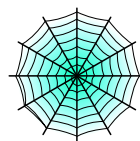


=

1



-




=

2



-



=

5



-



=

7



-

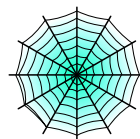


=

3



-



=

2



-



=

7



-



=

4