










Bryd billedkoden og løs regnestykkerne.

								
9	2	1	5	7	6	4	3	8

$$\text{Ghost} - \text{Jack-o'-lantern} = \square$$

$$\text{Spiderweb} - \text{Spider} = \square$$

$$\text{Cat} - \text{Flying bat} = \square$$

$$\text{Cat} - \text{Spiderweb} = \square$$

$$\text{Moon with bat} - \text{Ghost} = \square$$

$$\text{Cat} - \text{Skull} = \square$$

$$\text{Flying bat} - \text{Spider} = \square$$

$$\text{Flying bat} - \text{Spider} = \square$$










$$\text{Hanging bat} - \text{Skull} = \square$$

$$\text{Ghost} - \text{Spider} = \square$$

$$\text{Hanging bat} - \text{Flying bat} = \square$$

$$\text{Cat} - \text{Ghost} = \square$$

Bryd billedkoden og løs regnestykkerne.

								
9	2	1	5	7	6	4	3	8

$$\text{Ghost} - \text{Jack-o'-lantern} = \boxed{5}$$

$$\text{Spiderweb} - \text{Spider} = \boxed{3}$$

$$\text{Cat} - \text{Flying bat} = \boxed{5}$$

$$\text{Cat} - \text{Spiderweb} = \boxed{3}$$

$$\text{Moon with bat wings} - \text{Ghost} = \boxed{3}$$

$$\text{Cat} - \text{Skull} = \boxed{4}$$

$$\text{Flying bat} - \text{Spider} = \boxed{1}$$

$$\text{Flying bat} - \text{Spider} = \boxed{1}$$

$$\text{Hanging bat} - \text{Skull} = \boxed{3}$$

$$\text{Ghost} - \text{Spider} = \boxed{4}$$

$$\text{Hanging bat} - \text{Flying bat} = \boxed{4}$$

$$\text{Cat} - \text{Ghost} = \boxed{2}$$