





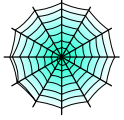




Bryd billedkoden og løs regnestykkerne.

								
6	3	8	2	5	9	4	7	1

$$\text{spider} - \text{skull} = \square$$

$$\text{moon with bat} - \text{spider} = \square$$

$$\text{spiderweb} - \text{skull} = \square$$

$$\text{witch} - \text{spider} = \square$$

$$\text{spider} - \text{pumpkin} = \square$$

$$\text{spider} - \text{pumpkin} = \square$$

$$\text{ghost} - \text{bat} = \square$$

$$\text{bat} - \text{pumpkin} = \square$$







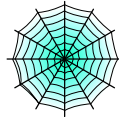


$$\text{witch} - \text{spiderweb} = \square$$

$$\text{bat} - \text{spiderweb} = \square$$

$$\text{bat} - \text{witch} = \square$$

$$\text{cat} - \text{pumpkin} = \square$$

Bryd billedkoden og løs regnestykkerne.

								
6	3	8	2	5	9	4	7	1

$$\text{spider} - \text{skull} = \boxed{2}$$

$$\text{moon with bat} - \text{spider} = \boxed{4}$$

$$\text{spiderweb} - \text{skull} = \boxed{3}$$

$$\text{witch} - \text{spider} = \boxed{2}$$

$$\text{spider} - \text{pumpkin} = \boxed{1}$$

$$\text{spider} - \text{pumpkin} = \boxed{1}$$

$$\text{ghost} - \text{bat} = \boxed{3}$$

$$\text{bat} - \text{pumpkin} = \boxed{4}$$

$$\text{witch} - \text{spiderweb} = \boxed{1}$$

$$\text{bat} - \text{spiderweb} = \boxed{2}$$

$$\text{bat} - \text{witch} = \boxed{1}$$

$$\text{cat} - \text{pumpkin} = \boxed{6}$$