










Bryd billedkoden og løs regnestykkerne.

								
6	3	9	8	5	4	1	7	2

$$\text{cat} - \text{spiderweb} = \square$$

$$\text{spider} - \text{spiderweb} = \square$$

$$\text{cat} - \text{skull} = \square$$

$$\text{skull} - \text{bat} = \square$$

$$\text{cat} - \text{spider} = \square$$

$$\text{cat} - \text{pumpkin} = \square$$

$$\text{spiderweb} - \text{witch} = \square$$

$$\text{pumpkin} - \text{bat} = \square$$










$$\text{pumpkin} - \text{bat} = \square$$

$$\text{skull} - \text{spider} = \square$$

$$\text{pumpkin} - \text{bat} = \square$$

$$\text{skull} - \text{pumpkin} = \square$$

Bryd billedkoden og løs regnestykkerne.

								
6	3	9	8	5	4	1	7	2

$$\text{cat} - \text{spiderweb} = \boxed{4}$$

$$\text{spider} - \text{spiderweb} = \boxed{1}$$

$$\text{cat} - \text{skull} = \boxed{1}$$

$$\text{skull} - \text{bat} = \boxed{1}$$

$$\text{cat} - \text{spider} = \boxed{3}$$

$$\text{cat} - \text{pumpkin} = \boxed{5}$$

$$\text{spiderweb} - \text{moon with witch} = \boxed{3}$$

$$\text{pumpkin} - \text{moon with bat} = \boxed{1}$$

$$\text{pumpkin} - \text{moon with bat} = \boxed{1}$$

$$\text{skull} - \text{spider} = \boxed{4}$$

$$\text{pumpkin} - \text{moon with bat} = \boxed{1}$$

$$\text{skull} - \text{pumpkin} = \boxed{4}$$