










Bryd billedkoden og løs regnestykkerne.

								
7	5	8	1	3	2	4	9	6

$$\text{Spider} - \text{Skull} = \boxed{\phantom{00}}$$

$$\text{Bat} - \text{Witch on yellow moon} = \boxed{\phantom{00}}$$

$$\text{Spiderweb} - \text{Cat} = \boxed{\phantom{00}}$$

$$\text{Pumpkin} - \text{Bat} = \boxed{\phantom{00}}$$

$$\text{Ghost} - \text{Bat} = \boxed{\phantom{00}}$$

$$\text{Spiderweb} - \text{Skull} = \boxed{\phantom{00}}$$

$$\text{Pumpkin} - \text{Bat} = \boxed{\phantom{00}}$$

$$\text{Skull} - \text{Bat} = \boxed{\phantom{00}}$$








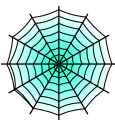

$$\text{Ghost} - \text{Bat on yellow moon} = \boxed{\phantom{00}}$$

$$\text{Witch on yellow moon} - \text{Bat on yellow moon} = \boxed{\phantom{00}}$$

$$\text{Pumpkin} - \text{Witch on yellow moon} = \boxed{\phantom{00}}$$

$$\text{Spider} - \text{Pumpkin} = \boxed{\phantom{00}}$$

Bryd billedkoden og løs regnestykkerne.

								
7	5	8	1	3	2	4	9	6

$$\text{Spider} - \text{Skull} = \boxed{1}$$

$$\text{Bat} - \text{Yellow moon with witch} = \boxed{1}$$

$$\text{Spiderweb} - \text{Cat} = \boxed{1}$$

$$\text{Pumpkin} - \text{Bat} = \boxed{1}$$

$$\text{Ghost} - \text{Bat} = \boxed{2}$$

$$\text{Spiderweb} - \text{Skull} = \boxed{3}$$

$$\text{Pumpkin} - \text{Bat} = \boxed{1}$$

$$\text{Skull} - \text{Bat} = \boxed{3}$$

$$\text{Ghost} - \text{Yellow moon with bat} = \boxed{4}$$

$$\text{Yellow moon with witch} - \text{Yellow moon with bat} = \boxed{1}$$

$$\text{Pumpkin} - \text{Yellow moon with witch} = \boxed{2}$$

$$\text{Spider} - \text{Pumpkin} = \boxed{3}$$