










Bryd billedkoden og indsæt de manglende tal.

								
6	3	4	1	7	9	5	2	8

$$\square - \text{pumpkin} = \text{ghost}$$

$$\square - \text{witch} = \text{witch}$$

$$\text{bat} - \square = \text{skull}$$

$$\square - \text{witch} = \text{spiderweb}$$

$$\square - \text{ghost} = \text{moon with bat}$$

$$\text{skull} - \square = \text{pumpkin}$$

$$\text{skull} - \square = \text{ghost}$$

$$\square - \text{witch} = \text{pumpkin}$$










$$\square - \text{spiderweb} = \text{ghost}$$

$$\square - \text{ghost} = \text{spiderweb}$$

$$\square - \text{moon with bat} = \text{moon with bat}$$

$$\square - \text{pumpkin} = \text{spiderweb}$$

Bryd billedkoden og indsæt de manglende tal.

								
6	3	4	1	7	9	5	2	8

$$\boxed{7} - \text{pumpkin} = \text{ghost}$$

$$\text{bat} - \boxed{3} = \text{skull}$$

$$\boxed{5} - \text{ghost} = \text{moon with bat}$$

$$\text{skull} - \boxed{3} = \text{ghost}$$

$$\boxed{8} - \text{spiderweb} = \text{ghost}$$

$$\boxed{4} - \text{moon with bat} = \text{moon with bat}$$

$$\boxed{2} - \text{witch} = \text{witch}$$

$$\boxed{6} - \text{witch} = \text{spiderweb}$$

$$\text{skull} - \boxed{4} = \text{pumpkin}$$

$$\boxed{5} - \text{witch} = \text{pumpkin}$$

$$\boxed{8} - \text{ghost} = \text{spiderweb}$$

$$\boxed{9} - \text{pumpkin} = \text{spiderweb}$$