
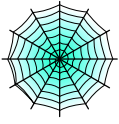





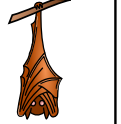



Bryd billedkoden og indsæt de manglende tal.

								
8	1	6	2	7	5	3	9	4

$$\square - \text{bat on moon} = \text{spiderweb}$$

$$\square - \text{skull} = \text{spiderweb}$$

$$\square - \text{bat} = \text{ghost}$$

$$\square - \text{pumpkin} = \text{bat on moon}$$

$$\text{ghost} - \square = \text{spiderweb}$$

$$\text{cat} - \square = \text{ghost}$$

$$\text{bat} - \square = \text{ghost}$$

$$\square - \text{bat on moon} = \text{bat on moon}$$










$$\text{skull} - \square = \text{bat on moon}$$

$$\text{bat} - \square = \text{pumpkin}$$

$$\text{ghost} - \square = \text{pumpkin}$$

$$\text{bat on moon} - \square = \text{bat}$$

Bryd billedkoden og indsæt de manglende tal.

								
8	1	6	2	7	5	3	9	4

$$\boxed{4} - \text{bat on moon} = \text{spiderweb}$$

$$\boxed{9} - \text{skull} = \text{spiderweb}$$

$$\boxed{9} - \text{bat} = \text{ghost}$$

$$\boxed{5} - \text{pumpkin} = \text{bat on moon}$$

$$\text{ghost} - \boxed{3} = \text{spiderweb}$$

$$\text{cat} - \boxed{3} = \text{ghost}$$

$$\text{bat} - \boxed{1} = \text{ghost}$$

$$\boxed{9} - \text{bat on moon} = \text{witch on broom}$$

$$\text{skull} - \boxed{2} = \text{witch on broom}$$

$$\text{bat} - \boxed{3} = \text{pumpkin}$$

$$\text{ghost} - \boxed{2} = \text{pumpkin}$$

$$\text{witch on broom} - \boxed{1} = \text{bat}$$