










Bryd billedkoden og indsæt de manglende tal.

								
7	1	6	2	8	5	4	9	3

$$- \text{bat hanging} = \text{bat hanging}$$



$$= \text{spider}$$

$$- \text{spiderweb} = \text{moon with bat}$$

$$- \text{bat hanging} = \text{pumpkin}$$



$$- \text{[empty box]} = \text{spiderweb}$$



$$- \text{[empty box]} = \text{moon with bat}$$



$$- \text{[empty box]} = \text{spiderweb}$$



$$- \text{[empty box]} = \text{bat}$$

$$- \text{spider} = \text{bat}$$

$$- \text{spider} = \text{spiderweb}$$












$$- \text{[empty box]} = \text{bat}$$



$$- \text{[empty box]} = \text{moon with bat}$$

Bryd billedkoden og indsæt de manglende tal.

								
7	1	6	2	8	5	4	9	3

$$\boxed{8} - \text{bat hanging} = \text{bat hanging}$$

$$\text{ghost} - \boxed{6} = \text{spider}$$

$$\boxed{8} - \text{spiderweb} = \text{moon with bat}$$

$$\boxed{9} - \text{bat hanging} = \text{pumpkin}$$

$$\text{skull} - \boxed{5} = \text{spiderweb}$$

$$\text{skull} - \boxed{1} = \text{moon with bat}$$

$$\text{pumpkin} - \boxed{3} = \text{spiderweb}$$

$$\text{spider} - \boxed{2} = \text{bat}$$

$$\boxed{4} - \text{spider} = \text{bat}$$

$$\boxed{5} - \text{spider} = \text{spiderweb}$$

$$\text{pumpkin} - \boxed{4} = \text{bat}$$

$$\text{ghost} - \boxed{3} = \text{moon with bat}$$