











































Bryd billedkoden og indsæt de manglende tal.

								
9	7	5	6	8	1	4	3	2

	-	<input type="text"/>	=	
	-	<input type="text"/>	=	
<input type="text"/>	-		=	
<input type="text"/>	-		=	
	-	<input type="text"/>	=	
	-	<input type="text"/>	=	

<input type="text"/>	-		=	
<input type="text"/>	-		=	
<input type="text"/>	-		=	
	-	<input type="text"/>	=	
	-	<input type="text"/>	=	
<input type="text"/>	-		=	

Bryd billedkoden og indsæt de manglende tal.

								
9	7	5	6	8	1	4	3	2

$$\text{Skull} - \boxed{4} = \text{Witch}$$

$$\boxed{7} - \text{Pumpkin} = \text{Bat}$$

$$\text{Pumpkin} - \boxed{3} = \text{Bat}$$

$$\boxed{5} - \text{Bat} = \text{Witch}$$

$$\boxed{3} - \text{Witch} = \text{Bat}$$

$$\boxed{9} - \text{Cat} = \text{Bat}$$

$$\boxed{7} - \text{Bat} = \text{Pumpkin}$$

$$\text{Pumpkin} - \boxed{2} = \text{Witch}$$

$$\text{Cat} - \boxed{5} = \text{Bat}$$

$$\text{Skull} - \boxed{1} = \text{Ghost}$$

$$\text{Cat} - \boxed{5} = \text{Bat}$$

$$\boxed{3} - \text{Witch} = \text{Bat}$$