







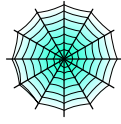


Bryd billedkoden og løs regnestykkerne.

								
8	4	2	7	5	9	3	6	1

$$\text{bat on cross} - \text{bat} = \square$$

$$\text{cat} - \text{bat on moon} = \square$$

$$\text{cat} - \text{bat} = \square$$

$$\text{bat} + \text{spiderweb} = \square$$

$$\text{cat} + \text{pumpkin} = \square$$

$$\text{spiderweb} + \text{ghost} = \square$$

$$\text{bat on cross} - \text{pumpkin} = \square$$

$$\text{bat on moon} + \text{pumpkin} = \square$$










$$\text{bat} - \text{bat on moon} = \square$$

$$\text{spiderweb} + \text{spiderweb} = \square$$

$$\text{cat} - \text{pumpkin} = \square$$

$$\text{bat on moon} + \text{bat on moon} = \square$$

Bryd billedkoden og løs regnestykkerne.

								
8	4	2	7	5	9	3	6	1

$$\text{bat on cross} - \text{bat} = 4$$

$$\text{cat} - \text{bat on moon} = 4$$

$$\text{cat} - \text{bat} = 2$$

$$\text{bat} + \text{spiderweb} = 6$$

$$\text{cat} + \text{pumpkin} = 9$$

$$\text{spiderweb} + \text{ghost} = 5$$

$$\text{bat on cross} - \text{pumpkin} = 7$$

$$\text{bat on moon} + \text{pumpkin} = 5$$

$$\text{bat} - \text{bat on moon} = 2$$

$$\text{spiderweb} + \text{spiderweb} = 2$$

$$\text{cat} - \text{pumpkin} = 5$$

$$\text{bat on moon} + \text{bat on moon} = 6$$