










Bryd billedkoden og løs regnestykkerne.

								
5	2	3	6	7	9	8	4	1

$$\text{Witch on broom} - \text{Hanging bat} = \boxed{\phantom{00}}$$

$$\text{Hanging bat} + \text{Cat} = \boxed{\phantom{00}}$$

$$\text{Spider} + \text{Bat} = \boxed{\phantom{00}}$$

$$\text{Ghost} - \text{Bat} = \boxed{\phantom{00}}$$

$$\text{Spider} - \text{Hanging bat} = \boxed{\phantom{00}}$$

$$\text{Spider} - \text{Hanging bat} = \boxed{\phantom{00}}$$

$$\text{Skull} + \text{Cat} = \boxed{\phantom{00}}$$

$$\text{Skull} + \text{Spiderweb} = \boxed{\phantom{00}}$$










$$\text{Cat} - \text{Spider} = \boxed{\phantom{00}}$$

$$\text{Hanging bat} + \text{Hanging bat} = \boxed{\phantom{00}}$$

$$\text{Ghost} + \text{Skull} = \boxed{\phantom{00}}$$

$$\text{Witch on broom} - \text{Hanging bat} = \boxed{\phantom{00}}$$

Bryd billedkoden og løs regnestykkerne.

								
5	2	3	6	7	9	8	4	1

$$\text{Witch on broom} - \text{Hanging bat} = 6$$

$$\text{Hanging bat} + \text{Cat} = 9$$

$$\text{Spider} + \text{Bat} = 7$$

$$\text{Ghost} - \text{Bat} = 5$$

$$\text{Spider} - \text{Hanging bat} = 2$$

$$\text{Spider} - \text{Hanging bat} = 2$$

$$\text{Skull} + \text{Cat} = 7$$

$$\text{Skull} + \text{Spiderweb} = 5$$

$$\text{Cat} - \text{Spider} = 1$$

$$\text{Hanging bat} + \text{Hanging bat} = 6$$

$$\text{Ghost} + \text{Skull} = 8$$

$$\text{Witch on broom} - \text{Hanging bat} = 6$$