










Bryd billedkoden og løs regnestykkerne.

								
5	8	6	7	1	3	9	4	2

$$\text{Spider} - \text{Bat} = \boxed{}$$

$$\text{Pumpkin} + \text{Hanging bat} = \boxed{}$$

$$\text{Yellow moon with bat} + \text{Pumpkin} = \boxed{}$$

$$\text{Yellow moon with witch} - \text{Yellow moon with bat} = \boxed{}$$

$$\text{Pumpkin} + \text{Ghost} = \boxed{}$$

$$\text{Yellow moon with witch} - \text{Pumpkin} = \boxed{}$$

$$\text{Spider} - \text{Pumpkin} = \boxed{}$$

$$\text{Yellow moon with bat} - \text{Cat} = \boxed{}$$










$$\text{Ghost} + \text{Hanging bat} = \boxed{}$$

$$\text{Ghost} + \text{Pumpkin} = \boxed{}$$

$$\text{Yellow moon with witch} + \text{Ghost} = \boxed{}$$

$$\text{Pumpkin} - \text{Ghost} = \boxed{}$$

Bryd billedkoden og løs regnestykkerne.

								
5	8	6	7	1	3	9	4	2

$$\text{Spider} - \text{Bat} = 5$$

$$\text{Jack-o'-lantern} + \text{Hanging bat} = 9$$

$$\text{Moon with bat} + \text{Jack-o'-lantern} = 8$$

$$\text{Moon with witch} - \text{Moon with bat} = 2$$

$$\text{Jack-o'-lantern} + \text{Ghost} = 4$$

$$\text{Moon with witch} - \text{Jack-o'-lantern} = 4$$

$$\text{Spider} - \text{Jack-o'-lantern} = 6$$

$$\text{Moon with bat} - \text{Cat} = 3$$

$$\text{Ghost} + \text{Hanging bat} = 7$$

$$\text{Ghost} + \text{Jack-o'-lantern} = 4$$

$$\text{Moon with witch} + \text{Ghost} = 8$$

$$\text{Jack-o'-lantern} - \text{Ghost} = 2$$