










Bryd billedkoden og løs regnestykkerne.

								
8	6	9	7	2	1	5	4	3

$$\text{skull} - \text{spiderweb} = \boxed{\phantom{00}}$$

$$\text{spiderweb} + \text{bat hanging} = \boxed{\phantom{00}}$$

$$\text{spiderweb} + \text{bat} = \boxed{\phantom{00}}$$

$$\text{bat} - \text{witch} = \boxed{\phantom{00}}$$

$$\text{bat hanging} + \text{spiderweb} = \boxed{\phantom{00}}$$

$$\text{witch} - \text{spiderweb} = \boxed{\phantom{00}}$$

$$\text{cat} - \text{spiderweb} = \boxed{\phantom{00}}$$

$$\text{bat hanging} + \text{cat} = \boxed{\phantom{00}}$$








$$\text{witch} + \text{skull} = \boxed{\phantom{00}}$$

$$\text{witch} - \text{spiderweb} = \boxed{\phantom{00}}$$

$$\text{skull} + \text{bat hanging} = \boxed{\phantom{00}}$$

$$\text{spider} - \text{witch} = \boxed{\phantom{00}}$$

Bryd billedkoden og løs regnestykkerne.

								
8	6	9	7	2	1	5	4	3

$$\text{skull} - \text{spiderweb} = 4$$

$$\text{spiderweb} + \text{bat hanging} = 4$$

$$\text{spiderweb} + \text{bat} = 9$$

$$\text{bat} - \text{witch} = 1$$

$$\text{bat hanging} + \text{spiderweb} = 4$$

$$\text{witch} - \text{spiderweb} = 2$$

$$\text{cat} - \text{spiderweb} = 5$$

$$\text{bat hanging} + \text{cat} = 9$$

$$\text{witch} + \text{skull} = 9$$

$$\text{witch} - \text{spiderweb} = 2$$

$$\text{skull} + \text{bat hanging} = 8$$

$$\text{spider} - \text{witch} = 4$$