










Bryd billedkoden og løs regnestykkerne.

								
5	2	4	9	8	1	6	7	3

$$\text{Skull} + \text{Spiderweb} = \square$$

$$\text{Spider} + \text{Bat} = \square$$

$$\text{Bat} + \text{Spider} = \square$$

$$\text{Ghost} - \text{Skull} = \square$$

$$\text{Cat} - \text{Spider} = \square$$

$$\text{Pumpkin} - \text{Spiderweb} = \square$$

$$\text{Spider} + \text{Bat} = \square$$

$$\text{Ghost} - \text{Pumpkin} = \square$$










$$\text{Bat} + \text{Cat} = \square$$

$$\text{Ghost} - \text{Spider} = \square$$

$$\text{Skull} - \text{Bat} = \square$$

$$\text{Pumpkin} + \text{Spiderweb} = \square$$

Bryd billedkoden og løs regnestykkerne.

								
5	2	4	9	8	1	6	7	3

$$\text{Skull} + \text{Spiderweb} = \boxed{9}$$

$$\text{Spider} + \text{Bat} = \boxed{4}$$

$$\text{Bat} + \text{Spider} = \boxed{4}$$

$$\text{Ghost} - \text{Skull} = \boxed{2}$$

$$\text{Cat} - \text{Spider} = \boxed{5}$$

$$\text{Pumpkin} - \text{Spiderweb} = \boxed{3}$$

$$\text{Spider} + \text{Bat} = \boxed{7}$$

$$\text{Ghost} - \text{Pumpkin} = \boxed{4}$$

$$\text{Bat} + \text{Cat} = \boxed{9}$$

$$\text{Ghost} - \text{Spider} = \boxed{6}$$

$$\text{Skull} - \text{Bat} = \boxed{3}$$

$$\text{Pumpkin} + \text{Spiderweb} = \boxed{7}$$