










Bryd billedkoden og løs regnestykkerne.

								
5	2	9	6	1	7	8	4	3

$$\text{Spider} + \text{Spiderweb} = \boxed{}$$

$$\text{Witch} - \text{Bat} = \boxed{}$$

$$\text{Pumpkin} + \text{Bat} = \boxed{}$$

$$\text{Pumpkin} + \text{Skull} = \boxed{}$$

$$\text{Ghost} - \text{Bat} = \boxed{}$$

$$\text{Bat} + \text{Ghost} = \boxed{}$$

$$\text{Witch} + \text{Spiderweb} = \boxed{}$$

$$\text{Witch} - \text{Spiderweb} = \boxed{}$$


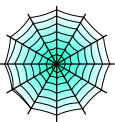







$$\text{Bat} + \text{Ghost} = \boxed{}$$

$$\text{Spider} - \text{Ghost} = \boxed{}$$

$$\text{Skull} - \text{Skull} = \boxed{}$$

$$\text{Skull} - \text{Spider} = \boxed{}$$

Bryd billedkoden og løs regnestykkerne.

								
5	2	9	6	1	7	8	4	3

$$\text{Spider} + \text{Spiderweb} = 7$$

$$\text{Witch} - \text{Bat} = 4$$

$$\text{Pumpkin} + \text{Bat} = 4$$

$$\text{Pumpkin} + \text{Skull} = 7$$

$$\text{Ghost} - \text{Bat} = 1$$

$$\text{Bat} + \text{Ghost} = 7$$

$$\text{Witch} + \text{Spiderweb} = 9$$

$$\text{Witch} - \text{Spiderweb} = 5$$

$$\text{Bat} + \text{Ghost} = 7$$

$$\text{Spider} - \text{Ghost} = 1$$

$$\text{Skull} - \text{Skull} = 3$$

$$\text{Skull} - \text{Spider} = 1$$