




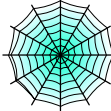





Bryd billedkoden og løs regnestykkerne.

								
9	5	2	3	1	8	6	7	4

$$\text{ghost} + \text{bat} = \square$$

$$\text{spiderweb} - \text{skull} = \square$$

$$\text{ghost} + \text{pumpkin} = \square$$

$$\text{spider} - \text{skull} = \square$$

$$\text{skull} + \text{skull} = \square$$

$$\text{spider} + \text{pumpkin} = \square$$

$$\text{bat} - \text{skull} = \square$$

$$\text{skull} + \text{ghost} = \square$$










$$\text{bat} + \text{pumpkin} = \square$$

$$\text{spiderweb} - \text{skull} = \square$$

$$\text{spiderweb} - \text{spider} = \square$$

$$\text{cat} - \text{skull} = \square$$

Bryd billedkoden og løs regnestykkerne.

								
9	5	2	3	1	8	6	7	4

$$\text{ghost} + \text{bat} = \boxed{8}$$

$$\text{spiderweb} - \text{skull} = \boxed{5}$$

$$\text{ghost} + \text{pumpkin} = \boxed{3}$$

$$\text{spider} - \text{skull} = \boxed{2}$$

$$\text{skull} + \text{skull} = \boxed{7}$$

$$\text{spider} + \text{pumpkin} = \boxed{7}$$

$$\text{bat} - \text{skull} = \boxed{4}$$

$$\text{skull} + \text{ghost} = \boxed{4}$$

$$\text{bat} + \text{pumpkin} = \boxed{9}$$

$$\text{spiderweb} - \text{skull} = \boxed{5}$$

$$\text{spiderweb} - \text{spider} = \boxed{3}$$

$$\text{cat} - \text{skull} = \boxed{6}$$