










Bryd billedkoden og indsæt de manglende tal.

								
1	2	7	4	8	6	5	9	3

$$\text{Witch} + \square = \text{Pumpkin}$$

$$\text{Ghost} - \square = \text{Bat}$$

$$\text{Scythe} - \square = \text{Ghost}$$

$$\square - \text{Pumpkin} = \text{Spiderweb}$$

$$\square - \text{Pumpkin} = \text{Skull}$$

$$\square + \text{Witch} = \text{Bat}$$

$$\square + \text{Skull} = \text{Cat}$$

$$\text{Ghost} - \square = \text{Cat}$$










$$\square + \text{Spiderweb} = \text{Scythe}$$

$$\square + \text{Skull} = \text{Skull}$$

$$\text{Bat} - \square = \text{Witch}$$

$$\text{Witch} + \square = \text{Cat}$$

Bryd billedkoden og indsæt de manglende tal.

								
1	2	7	4	8	6	5	9	3

$$\text{Witch} + \boxed{4} = \text{Pumpkin}$$

$$\boxed{3} + \text{Skull} = \text{Cat}$$

$$\text{Ghost} - \boxed{3} = \text{Bat}$$

$$\text{Ghost} - \boxed{1} = \text{Cat}$$

$$\text{Scythe} - \boxed{2} = \text{Ghost}$$

$$\boxed{7} + \text{Spiderweb} = \text{Scythe}$$

$$\boxed{7} - \text{Pumpkin} = \text{Spiderweb}$$

$$\boxed{5} + \text{Skull} = \text{Skull}$$

$$\boxed{8} - \text{Pumpkin} = \text{Skull}$$

$$\text{Bat} - \boxed{3} = \text{Witch}$$

$$\boxed{3} + \text{Witch} = \text{Bat}$$

$$\text{Witch} + \boxed{5} = \text{Cat}$$