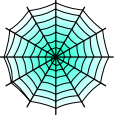










Bryd billedkoden og indsæt de manglende tal.

								
1	5	2	6	7	9	8	4	3

$$\square + \text{Pumpkin} = \text{Bat}$$

$$\square - \text{Bat} = \text{Moon with bat}$$

$$\square - \text{Moon with bat} = \text{Witch}$$

$$\text{Bat} + \square = \text{Witch}$$

$$\square + \text{Moon with bat} = \text{Witch}$$

$$\square + \text{Bat} = \text{Witch}$$

$$\text{Cat} - \square = \text{Ghost}$$

$$\text{Bat} - \square = \text{Pumpkin}$$










$$\text{Spiderweb} + \square = \text{Bat}$$

$$\square - \text{Bat} = \text{Ghost}$$

$$\text{Cat} + \square = \text{Skull}$$

$$\square - \text{Skull} = \text{Spiderweb}$$

Bryd billedkoden og indsæt de manglende tal.

								
1	5	2	6	7	9	8	4	3

$$\boxed{3} + \text{Pumpkin} = \text{Bat}$$

$$\boxed{8} - \text{Bat} = \text{Moon with bat}$$

$$\boxed{9} - \text{Moon with bat} = \text{Witch}$$

$$\text{Bat} + \boxed{1} = \text{Witch}$$

$$\boxed{3} + \text{Moon with bat} = \text{Witch}$$

$$\boxed{1} + \text{Bat} = \text{Witch}$$

$$\text{Cat} - \boxed{3} = \text{Ghost}$$

$$\text{Bat} - \boxed{3} = \text{Pumpkin}$$

$$\text{Spiderweb} + \boxed{4} = \text{Bat}$$

$$\boxed{9} - \text{Bat} = \text{Ghost}$$

$$\text{Cat} + \boxed{1} = \text{Skull}$$

$$\boxed{9} - \text{Skull} = \text{Spiderweb}$$