










Bryd billedkoden og indsæt de manglende tal.

								
3	6	1	2	5	4	9	8	7

$$\square - \text{ghost} = \text{bat}$$

$$\square + \text{skull} = \text{bat}$$

$$\text{ghost} + \square = \text{skull}$$

$$\square + \text{bat} = \text{cat}$$

$$\square - \text{spider} = \text{spiderweb}$$

$$\square - \text{bat} = \text{spiderweb}$$

$$\square + \text{bat} = \text{cat}$$

$$\text{spider} + \square = \text{skull}$$






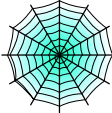



$$\square - \text{spiderweb} = \text{skull}$$

$$\text{skull} + \square = \text{spider}$$

$$\square - \text{cat} = \text{bat}$$

$$\square - \text{bat} = \text{skull}$$

Bryd billedkoden og indsæt de manglende tal.

								
3	6	1	2	5	4	9	8	7

$$\boxed{9} - \text{ghost} = \text{bat}$$

$$\boxed{1} + \text{skull} = \text{bat}$$

$$\text{ghost} + \boxed{1} = \text{skull}$$

$$\boxed{3} + \text{bat} = \text{cat}$$

$$\boxed{9} - \text{spider} = \text{spiderweb}$$

$$\boxed{7} - \text{bat} = \text{spiderweb}$$

$$\boxed{3} + \text{bat} = \text{cat}$$

$$\text{spider} + \boxed{3} = \text{skull}$$

$$\boxed{5} - \text{spiderweb} = \text{skull}$$

$$\text{skull} + \boxed{4} = \text{spider}$$

$$\boxed{9} - \text{cat} = \text{bat}$$

$$\boxed{4} - \text{bat} = \text{skull}$$