










Bryd billedkoden og indsæt de manglende tal.

								
5	4	1	7	2	6	3	9	8

$$\text{spider} + \square = \text{skull}$$

$$\text{pumpkin} + \square = \text{bat}$$

$$\square + \text{pumpkin} = \text{yellow moon with bat}$$

$$\square - \text{spider} = \text{yellow moon with witch}$$

$$\text{yellow moon with bat} - \square = \text{pumpkin}$$

$$\square - \text{spider} = \text{yellow moon with bat}$$

$$\text{skull} + \square = \text{ghost}$$

$$\text{ghost} + \square = \text{skull}$$










$$\text{ghost} - \square = \text{yellow moon with witch}$$

$$\text{ghost} - \square = \text{bat}$$

$$\text{bat hanging from a branch} - \square = \text{skull}$$

$$\square + \text{yellow moon with bat} = \text{skull}$$

Bryd billedkoden og indsæt de manglende tal.

								
5	4	1	7	2	6	3	9	8

$$\text{spider} + \boxed{2} = \text{skull}$$

$$\text{pumpkin} + \boxed{5} = \text{bat}$$

$$\boxed{3} + \text{pumpkin} = \text{yellow moon with bat}$$

$$\boxed{5} - \text{spider} = \text{yellow moon with witch}$$

$$\text{yellow moon with bat} - \boxed{3} = \text{pumpkin}$$

$$\boxed{7} - \text{spider} = \text{yellow moon with bat}$$

$$\text{skull} + \boxed{2} = \text{ghost}$$

$$\text{ghost} + \boxed{1} = \text{skull}$$

$$\text{ghost} - \boxed{5} = \text{yellow moon with witch}$$

$$\text{ghost} - \boxed{1} = \text{bat}$$

$$\text{bat hanging from a branch} - \boxed{4} = \text{skull}$$

$$\boxed{1} + \text{yellow moon with bat} = \text{skull}$$