











































Bryd billedkoden og indsæt de manglende tal.

								
5	8	4	3	2	7	9	6	1

	-	<input type="text"/>	=			<input type="text"/>	+		=	
<input type="text"/>	-		=			<input type="text"/>	-		=	
<input type="text"/>	+		=			<input type="text"/>	+		=	
<input type="text"/>	-		=			<input type="text"/>	+		=	
<input type="text"/>	+		=			<input type="text"/>	-		=	
	+	<input type="text"/>	=				-	<input type="text"/>	=	

Bryd billedkoden og indsæt de manglende tal.

								
5	8	4	3	2	7	9	6	1

$$\text{pumpkin} - 5 = \text{skull}$$

$$3 + \text{skull} = \text{spiderweb}$$

$$3 - \text{ghost} = \text{bat on cross}$$

$$5 - \text{ghost} = \text{witch}$$

$$3 + \text{bat} = \text{skull}$$

$$1 + \text{spiderweb} = \text{skull}$$

$$5 - \text{skull} = \text{bat on cross}$$

$$7 + \text{bat on cross} = \text{skull}$$

$$5 + \text{bat on cross} = \text{moon with bat}$$

$$3 - \text{ghost} = \text{bat on cross}$$

$$\text{bat on cross} + 3 = \text{skull}$$

$$\text{spiderweb} - 6 = \text{bat on cross}$$