










Bryd billedkoden og indsæt de manglende tal.

								
5	4	7	8	9	2	1	3	6

$$\text{Skull} + \square = \text{Hanging bat}$$

$$\square + \text{Skull} = \text{Pumpkin}$$

$$\text{Bat} - \square = \text{Skull}$$

$$\text{Hanging bat} - \square = \text{Spiderweb}$$

$$\text{Hanging bat} + \square = \text{Cat}$$

$$\square - \text{Witch} = \text{Spiderweb}$$

$$\square + \text{Hanging bat} = \text{Cat}$$

$$\text{Yellow moon with bat} - \square = \text{Ghost}$$










$$\text{Bat} + \square = \text{Cat}$$

$$\text{Yellow moon with bat} - \square = \text{Pumpkin}$$

$$\square - \text{Skull} = \text{Ghost}$$

$$\square + \text{Spiderweb} = \text{Witch}$$

Bryd billedkoden og indsæt de manglende tal.

								
5	4	7	8	9	2	1	3	6

$$\text{Skull} + \boxed{2} = \text{Hanging bat}$$

$$\boxed{1} + \text{Skull} = \text{Pumpkin}$$

$$\text{Flying bat} - \boxed{4} = \text{Skull}$$

$$\text{Hanging bat} - \boxed{4} = \text{Spiderweb}$$

$$\text{Hanging bat} + \boxed{3} = \text{Cat}$$

$$\boxed{3} - \text{Witch} = \text{Spiderweb}$$

$$\boxed{3} + \text{Hanging bat} = \text{Cat}$$

$$\text{Yellow moon with bat} - \boxed{3} = \text{Ghost}$$

$$\text{Flying bat} + \boxed{1} = \text{Cat}$$

$$\text{Yellow moon with bat} - \boxed{5} = \text{Pumpkin}$$

$$\boxed{9} - \text{Skull} = \text{Ghost}$$

$$\boxed{1} + \text{Spiderweb} = \text{Witch}$$